

MATHEMATICS – WORKSHEET

CH.1-NUMBERS UPTO 50

CH.5- NUMBERS UPTO 100

DATE: _____ NAME : _____ CLASS : I

Write the following numbers in words :

33 _____

46 _____

56 _____

31 _____

12 _____

52 _____

77 _____

95 _____

Solve and fill in the blanks:

7tens and 3 ones = 73

2 tens and 5 ones =

3 tens and 9 ones =

5 tens and 2 ones =

4 tens and 1 one =

9 tens and 4 ones =

Write the numbers in ascending order:

22 to 26 : 22, 23, 24, 25, 26.

38 to 43 : _____

20 to 28 : _____




16 to 26 : _____




44 to 50 : _____






Comparing Numbers

Put the numbers into the right pot:

54 47 45	42 24 14	97 98 35
		
Smallest Biggest	Smallest Biggest	Smallest Biggest

56 66 65	77 87 78	33 68 14
		
Smallest Biggest	Smallest Biggest	Smallest Biggest

32 23 75	46 71 70	49 51 50
		
Smallest Biggest	Smallest Biggest	Smallest Biggest

Before - Between - After

Before	Between	After
____ 31	21 ____ 23	33 ____
____ 46	57 ____ 59	67 ____
____ 12	43 ____ 45	28 ____
____ 59	97 ____ 99	15 ____
____ 20	16 ____ 18	77 ____
____ 85	65 ____ 67	59 ____
____ 67	30 ____ 32	46 ____

© Kimberly Kitchens 2016